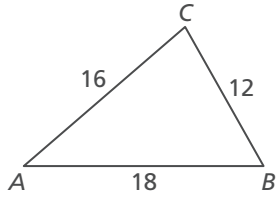


# 9.4

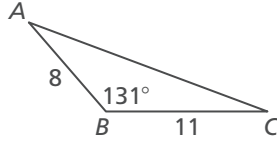
## Practice A

In Exercises 1–3, solve  $\triangle ABC$ . Round decimal answers to the nearest tenth.

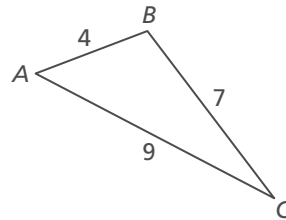
1.



2.

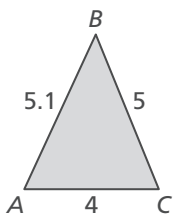


3.

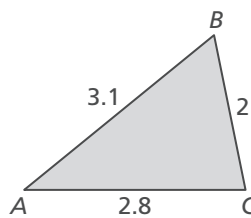


In Exercises 4 and 5, find the area of  $\triangle ABC$ . Round your answer to the nearest tenth.

4.



5.



6. Place each triangle case into one of the three categories according to the first step in solving the triangle.

Law of Sines		Law of Cosines		Neither	
AAA	AAS	ASA	SSS	SSA	SAS

7. Determine the measure of angle  $A$  in the design of the streetlamp shown in the diagram.

